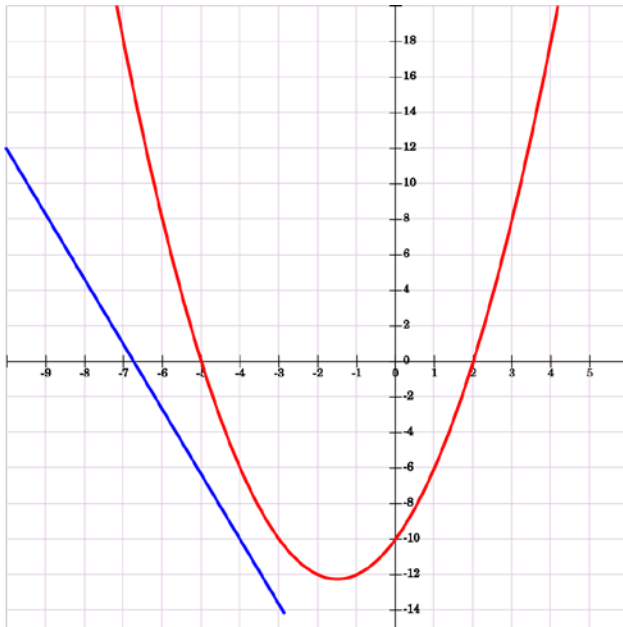


Math Review – Part C

Advanced Level

(Up to end of MAT 053)



A scientific calculator is allowed.

Answers provided in the final section.

Advanced Level Algebra

ALGEBRAIC EXPRESSIONS

Simplify the following algebraic expressions by combining like terms.

1. $2xy^2 - 5xy - 3xy^2 + 2xy$

2. $5x - 7(2x - 3) - 4$

3. $\frac{1}{2}(6x + 4) - \frac{2}{3}(3x - 9)$

A summary of the **Laws of Exponents** is given below.

$$x^1 = x$$

$$x^0 = 1 \text{ (where } x \neq 0\text{)}$$

$$x^{-n} = \frac{1}{x^n}$$

$$x^m \cdot x^n = x^{m+n}$$

$$\frac{x^m}{x^n} = x^{m-n}$$

$$(x^m)^n = x^{mn}$$

Using the above laws, complete the following simplifications.

4. $(3x^2)(5x)(x^2)^3$

5. $\frac{42x^6y^7}{-21x^{10}y^{-3}}$

6. $\left(\frac{4a^{-3}b^2}{-8ab^3}\right)^3$

LINEAR EQUATIONS AND INEQUALITIES

Solve each of the following linear equations.

7. $5x + 7 = 2x - 8$

8. $25 - (x + 1) = 3x$

9. $\frac{3x}{2} + 5 = \frac{x}{3}$

10. $0.2x + 4.9 = 0.7x - 1.3$

Solve each of the following inequalities.

11. $2x \leq x - 8$

12. $3 - 5x \geq x + 12$

13. $-4 < 2x + 2 \leq 8$

Write an algebraic equation or inequality to represent each problem. Then solve the problem using your equation or inequality. Be sure to identify the variable.

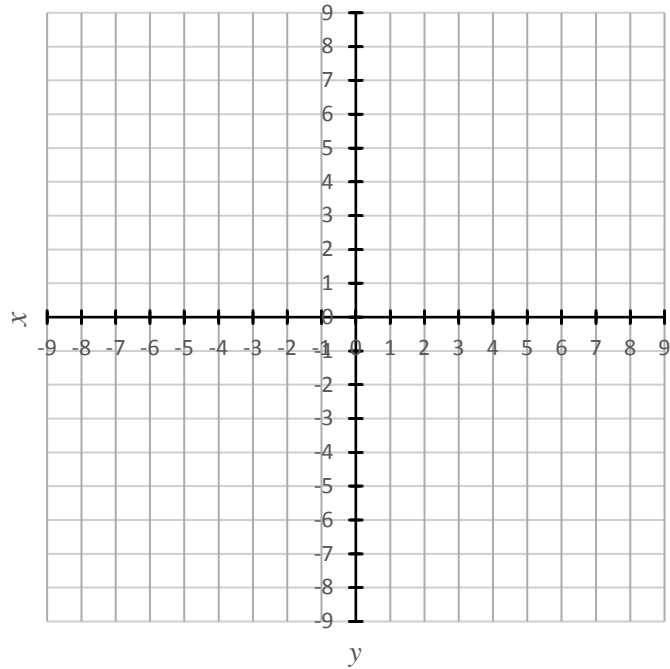
14. The sum of two consecutive odd integers is 56. Find the integers.
Let the 1st number = x
Let the 2nd number = $x+2$
15. Ms. Jones earns a base salary of \$880 per month, plus \$32 for each product that she sells. During November she earned a total of \$5680. How many products did she sell?
16. Tickets for a local concert sold for \$5 and \$8. Jim collected \$499 on the sale of 80 tickets. How many of each type did he sell?
17. You have \$20,000 to invest. You invest part of this at 6% interest and the rest at 8%. What is the most you can invest at 6% to earn at least \$1440 interest?

GRAPHING OF LINEAR EQUATIONS AND INEQUALITIES

Graph each of the following.

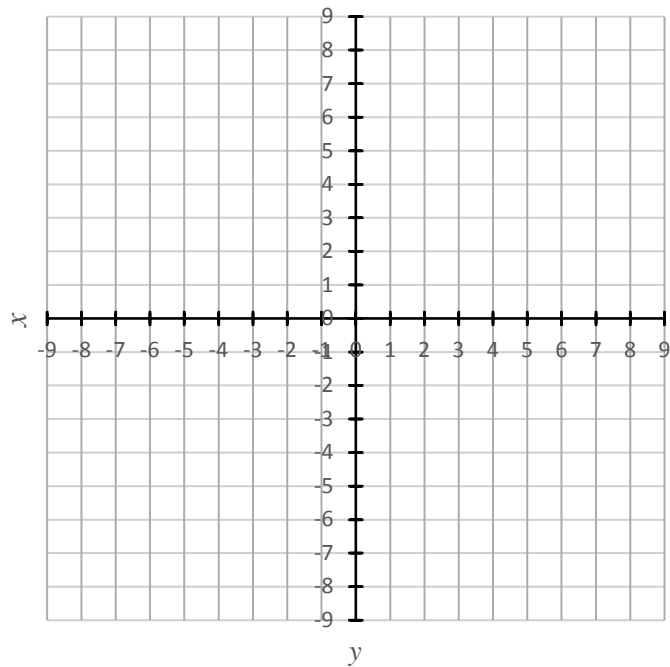
18. $y = \frac{1}{2}x - 4$

x	y



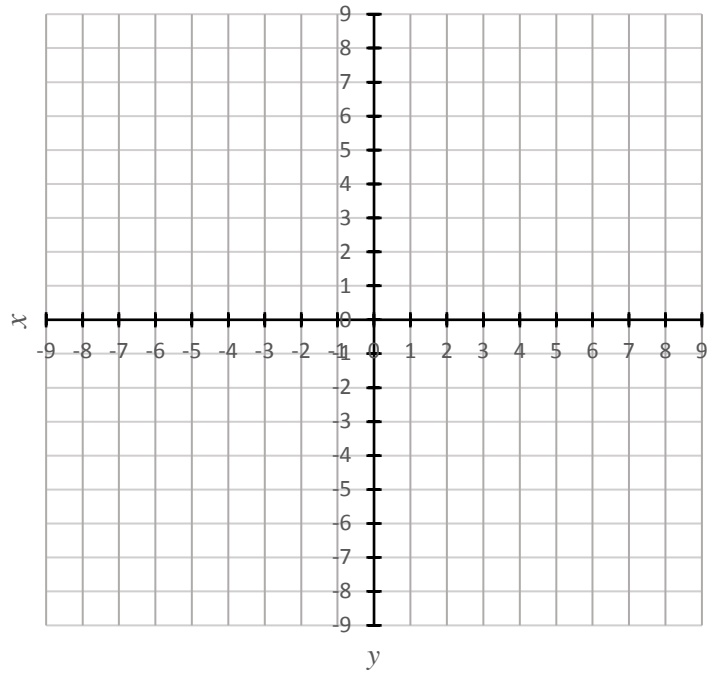
19. $3x + 2y = 6$

x	y



20. $2y > 6x + 4$

x	y



SYSTEMS OF EQUATIONS

A solution of a system of equations in two variables is an ordered pair of numbers that makes both equations true.

Solve the following systems of equations.

21. $x + y = 4$
 $x - y = 2$

22. $y = 7 - x$
 $2x - y = 8$

23. $5x + 3y = 17$
 $-5x + 2y = 3$

FACTORING POLYNOMIALS

Factor each of the following.

24. $x^2 + 10x + 25$

25. $3x^4 - 12$

26. $15x^2 + 7x - 2$

27. $8x^3 + 125$

RATIONAL EXPRESSIONS AND EQUATIONS

Simplify.

$$28. \frac{x^4}{3x+6} \cdot \frac{5x+10}{5x^2}$$

$$29. \frac{y^2-9}{y+2} \div \frac{y+3}{y+2}$$

$$30. \frac{3x}{7} + \frac{2y}{3x}$$

$$31. \frac{a}{a+3} - \frac{a-4}{a}$$

Solve each equation.

$$32. \frac{4}{5} + \frac{x}{3} = \frac{x}{5}$$

$$33. \frac{3}{y+1} = \frac{2}{y-3}$$

$$34. \frac{50}{x} - \frac{50}{x-2} = \frac{4}{x}$$

Solve each problem using an algebraic equation.

35. A tank can be filled in 18 hours by pipe A alone and in 22 hours by pipe B alone. How long will it take to fill the tank if both pipes are in operation?
36. The speed of a river is 5 km per hour. A boat travels 7 km upstream in the same time as it takes to travel 16 km downstream. What would be the speed of the boat in still water?

RADICAL EXPRESSIONS AND EQUATIONS

Simplify by combining like radical terms.

37. $2\sqrt{3} - 5\sqrt{5} + 4\sqrt{3} - 2\sqrt{5}$

38. $3\sqrt{45} + 3\sqrt{5}$

39. $\sqrt{25x-25} - \sqrt{9x-9}$

Multiply and simplify the following.

40. $\sqrt{5}(2+3\sqrt{5})$

41. $(2-\sqrt{3})(2+\sqrt{3})$

42. $(\sqrt{5}+\sqrt{2})(2\sqrt{5}-3\sqrt{2})$

Simplify.

43. $\sqrt{16x^4}$

44. $\sqrt[3]{-8}$

45. $\sqrt[8]{(-2)^8}$

Solve each equation.

46. $\sqrt{x}-7=3$

47. $x+1=3\sqrt{x-1}$

48. $\sqrt{5x-3}=\sqrt{2x+3}$

QUADRATIC EQUATIONS

The quadratic formula below is important; be sure to remember it.

$$x = \frac{-b \pm \sqrt{b^2 - 4ac}}{2a}$$

Solve each of the following quadratic equations.

49. $x^2 - 6x + 9 = 0$

50. $x^2 - 2x - 5 = 0$

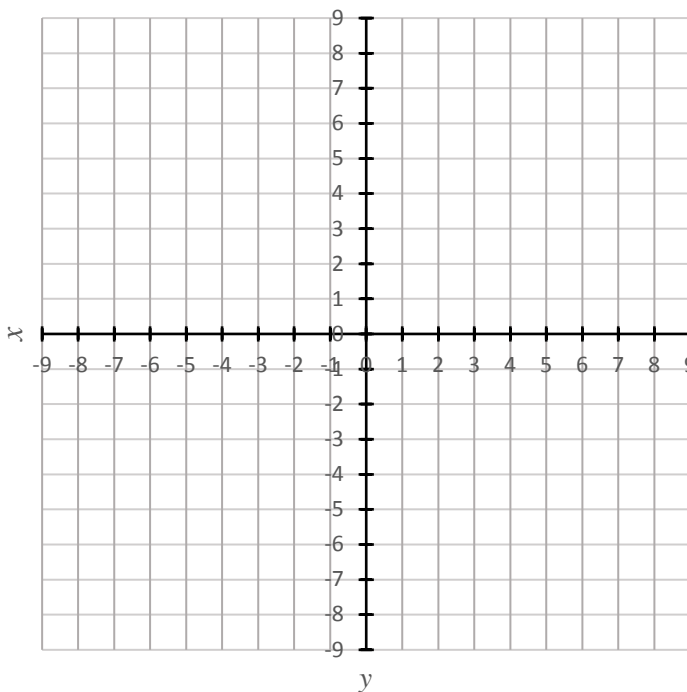
51. $4x^2 + 5x - 6 = 0$

52. $\frac{x+3}{x} = \frac{x-4}{3}$

Graph each of the following questions.

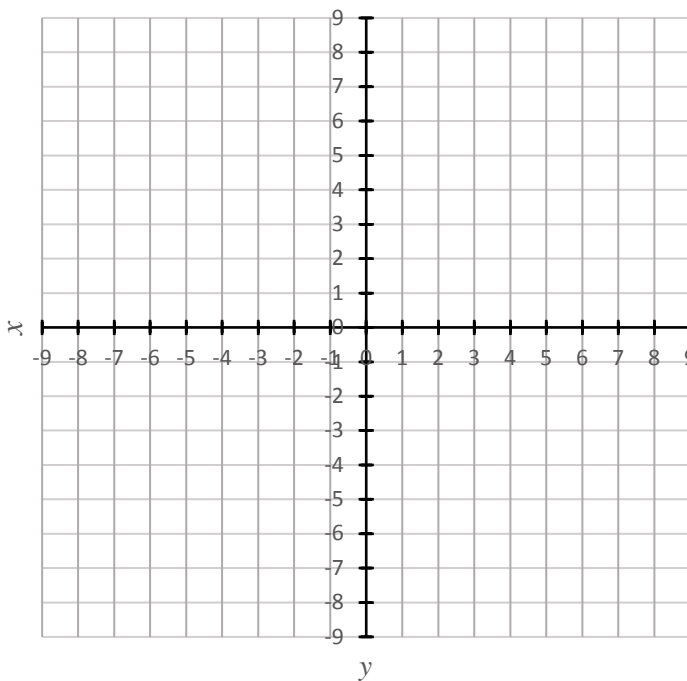
53. $y = (x + 2)^2 - 3$

x	y



54. $y = -2(x - 1)^2 + 1$

x	y



FUNCTIONS

Given $f(x) = x^2$ and $g(x) = 3x + 2$, find the following.

55. $f(-2)$

56. $g\left(\frac{1}{3}\right)$

57. $(f + g)(x)$

Advanced Level Trigonometry

TRIGONOMETRIC RATIOS

The **trigonometric ratios** are:

$$\sin = \frac{\text{opposite}}{\text{hypotenuse}}$$

$$\cos = \frac{\text{adjacent}}{\text{hypotenuse}}$$

$$\tan = \frac{\text{opposite}}{\text{adjacent}}$$

The **Law of Sines** is:

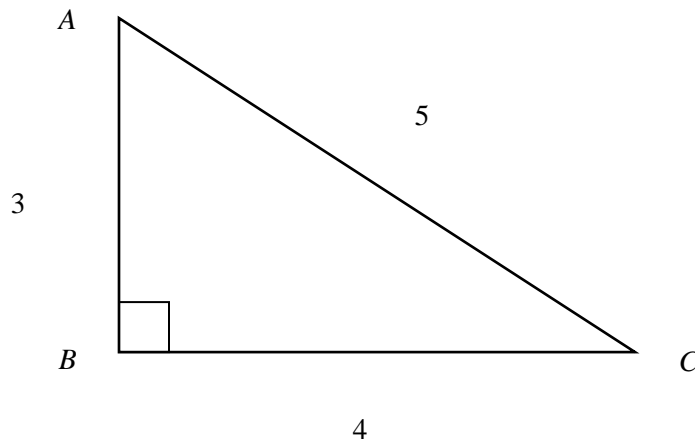
$$\frac{a}{\sin A} = \frac{b}{\sin B} = \frac{c}{\sin C}$$

The **Law of Cosines** is:

$$c^2 = a^2 + b^2 - 2ab \cos C$$

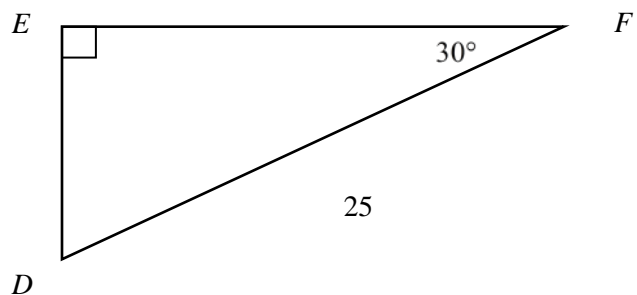
Use the above information or a scientific calculator to answer the following questions.

58. Find the measure of $\angle ACB$

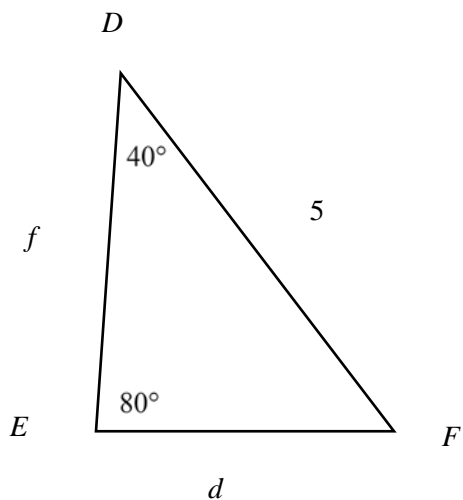


59. Find the length of \overline{EF}

$\overline{EF} =$



60. Solve the $\triangle DEF$ by finding the measure of each of those sides and angles whose quantity is not given and is represented only by letter.

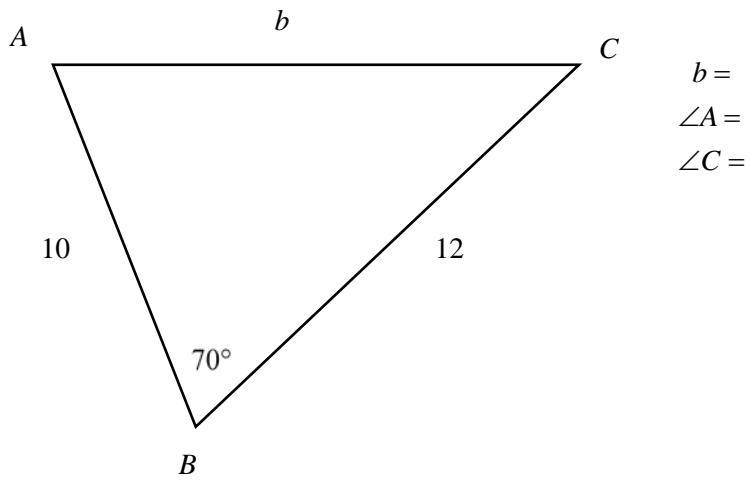


$\angle F =$

$f =$

$d =$

61. Solve the $\triangle ABC$ by finding the measure of each of those sides and angles represented only by letter.



Answers – Part C

Algebraic Expressions

1. $-xy^2 - 3xy$

2. $17 - 9x$

3. $x + 8$

4. $15x^9$

5. $-2x^{-4}y^{10}$ or $\frac{-2y^{10}}{x^4}$

6. $-\frac{1}{8a^{12}b^3}$

Linear Equations and Inequalities

7. $x = -5$

8. $x = 6$

9. $x = -\frac{30}{7}$

10. $x = 12.4$

11. $x \leq -8$

12. $x \leq \frac{-3}{2}$

13. $-3 < x \leq 3$

14. $n + n + 2 = 56$

The numbers are 27 and 29

15. $880 + 32n = 5680$

Number of products sold is 150

16. $5n + 8(80 - n) = 499$

47 tickets at \$5 and 33 tickets at \$8

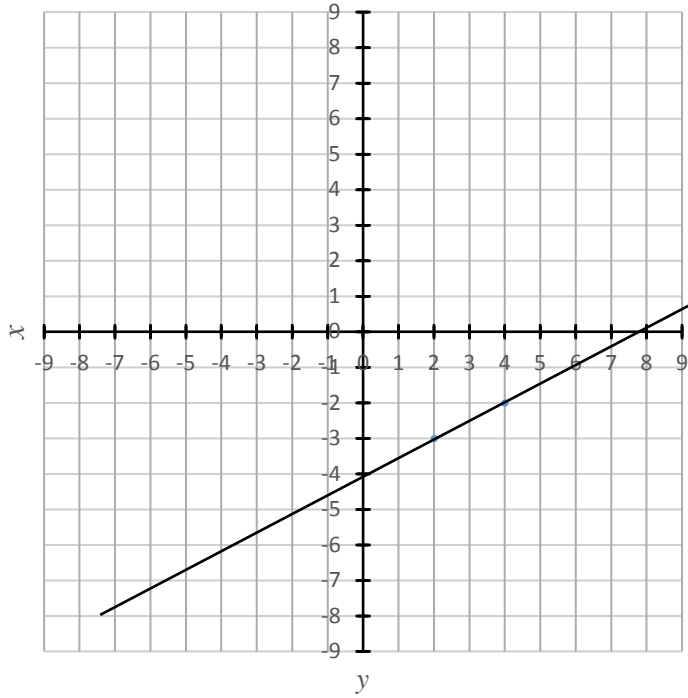
17. $6\%n + 8\%(20000 - n) \geq 1440$

\$8,000 max.

Graphing of Linear Equations and Inequalities

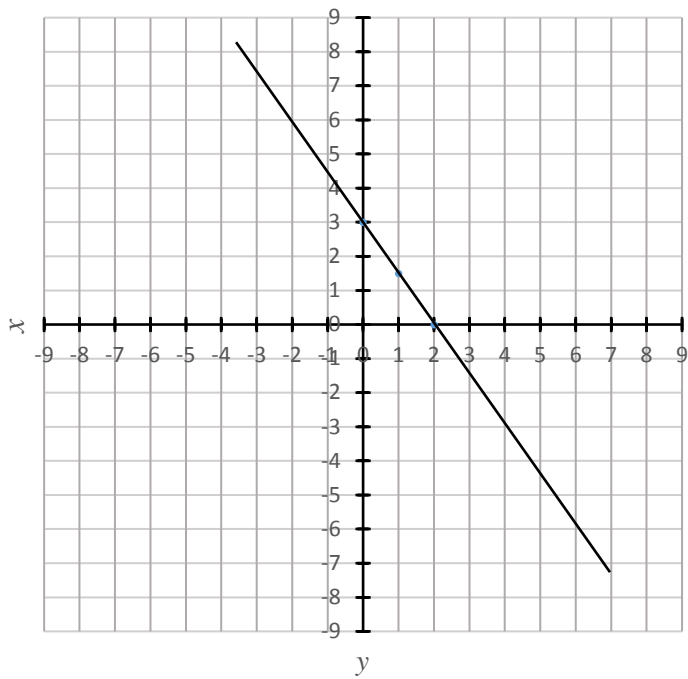
18. $y = \frac{1}{2}x - 4$

x	y
2	-3
4	-2



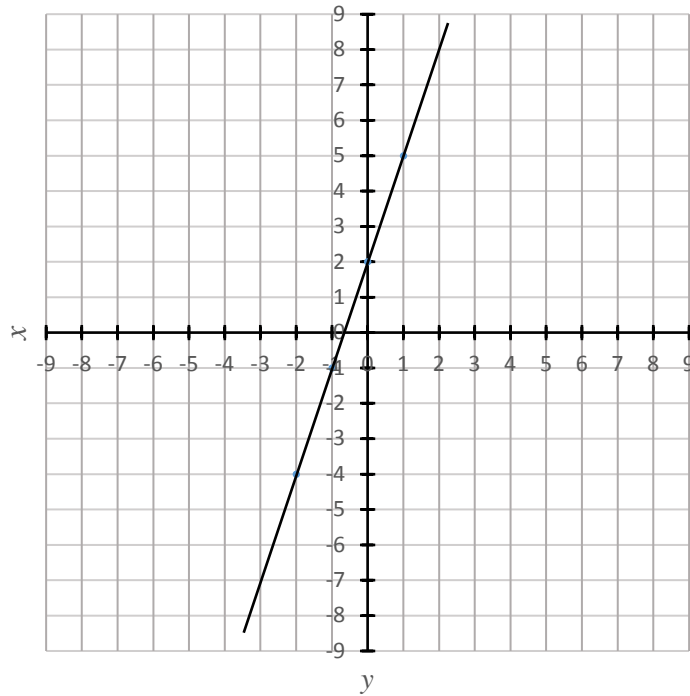
19. $3x + 2y = 6$

x	y
2	0
1	1.5
0	3



20. $2y > 6x + 4$

x	y
1	5
0	2
-1	-1
-2	-4



System of Equations

21. (3,1)

22. (5,2)

23. (1,4)

Factoring Polynomials

24. $(x+5)(x+5)$ or $(x+5)^2$

25. $3(x^4 - 4) = 3(x^2 + 2)(x^2 - 2)$

26. $(3x+2)(5x-1)$

27. $(2x+5)(4x^2 - 10x + 25)$

Rational Expressions and Equations

28. $\frac{x^2}{3}$

29. $y - 3$

30. $\frac{9x^2 + 14y}{21x}$

31. $\frac{a + 12}{a(a + 3)}$

32. $x = -6$

33. $y = 11$

34. $x = -23$

35. $\frac{1}{18} + \frac{1}{22} = \frac{1}{t}$

time is $9\frac{9}{10}$ or 9 hours and 54 minutes.

36. $\frac{7}{r - 5} = \frac{16}{r + 5}$

speed is 12.8 km per hour

Radical Expressions and Equations

37. $6\sqrt{3} - 7\sqrt{5}$

38. $12\sqrt{5}$

39. $2\sqrt{x - 1}$

40. $2\sqrt{5} + 15$

41. $4 - 3 = 1$

42. $4 - \sqrt{10}$

43. $4x^2$

44. -2

45. 2

46. $x = 100$

47. $x = 2$ or 5

48. $x = 2$

Quadratic Equations

49. $x = 3$

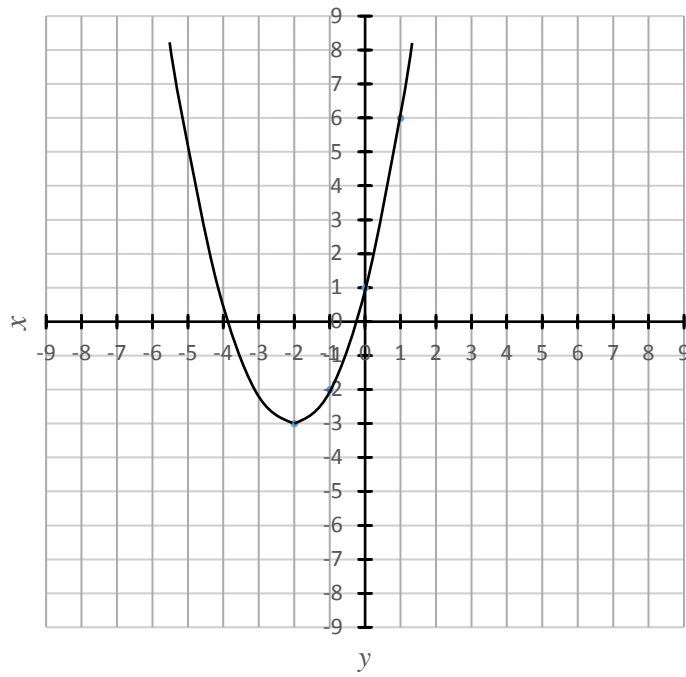
50. $x = 1 \pm \sqrt{6}$ or 3.45 and -1.45

51. $x = \frac{3}{4}$ and -2

52. $x = \frac{7 \pm \sqrt{85}}{2}$ or 8.1 and -1.1

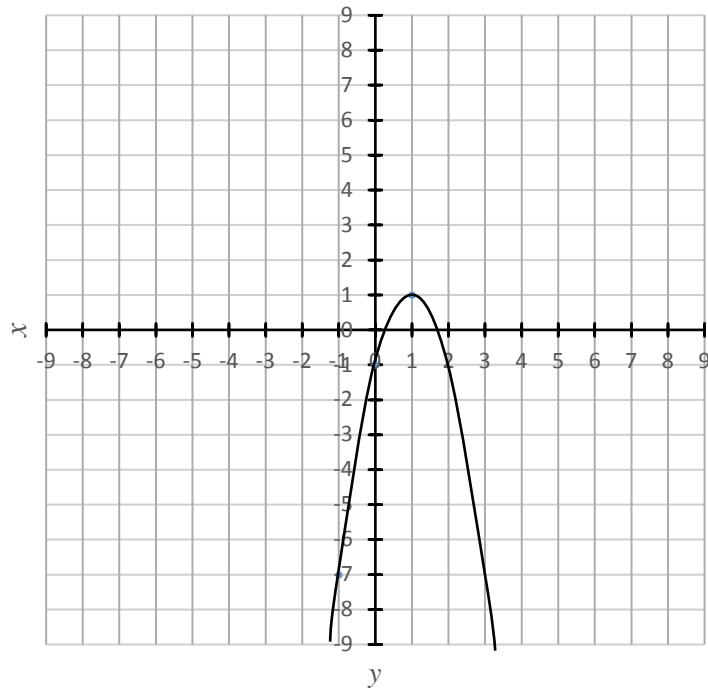
53. $y = (x+2)^2 - 3$

x	y
0	1
1	6
-1	-2
-2	-3



54. $y = -2(x-1)^2 + 1$

x	y
0	-1
1	1
-1	-7



Functions

55. 4

56. 3

57. $x^2 + 3x + 2$

Trigonometric Ratios

58. the measure of $\angle BCA = 36.9^\circ$

59. the measure of $\overline{EF} = 21.7$ (units)

60. $\angle F = 180^\circ - (80^\circ + 40^\circ) = 60^\circ$

$$\frac{d}{\sin 40^\circ} = \frac{5}{\sin 80^\circ} \quad d = 3.3$$

$$\frac{f}{\sin 60} = \frac{5}{\sin 80} \quad f = 4.4$$

61. $b^2 = 12^2 + 10^2 - 2 \times 12 \times 10 \times \cos 70^\circ$

$$b = 12.725$$

$$\frac{12}{\sin A} = \frac{12.725}{\sin 70^\circ}$$

$$\angle A = 62.4^\circ$$

$$\angle C = 180^\circ - (70^\circ + 62.4^\circ) = 47.6^\circ$$

Table of Trigonometric Ratios

Angle	tan	sin	cos	Angle	tan	sin	cos
1°	0.017	0.017	1.000	46°	1.036	0.719	0.695
2°	0.035	0.035	0.999	47°	1.072	0.731	0.682
3°	0.052	0.052	0.999	48°	1.111	0.743	0.669
4°	0.070	0.070	0.998	49°	1.150	0.755	0.656
5°	0.087	0.087	0.996	50°	1.192	0.766	0.643
6°	0.105	0.105	0.995	51°	1.235	0.777	0.629
7°	0.123	0.122	0.993	52°	1.280	0.788	0.616
8°	0.141	0.139	0.990	53°	1.327	0.799	0.602
9°	0.158	0.156	0.988	54°	1.376	0.809	0.588
10°	0.176	0.174	0.985	55°	1.428	0.819	0.574
11°	0.194	0.191	0.982	56°	1.483	0.829	0.559
12°	0.213	0.208	0.978	57°	1.540	0.839	0.545
13°	0.231	0.225	0.974	58°	1.600	0.848	0.530
14°	0.249	0.242	0.970	59°	1.664	0.857	0.515
15°	0.268	0.259	0.966	60°	1.732	0.866	0.500
16°	0.287	0.276	0.961	61°	1.804	0.875	0.485
17°	0.306	0.292	0.956	62°	1.881	0.883	0.469
18°	0.325	0.309	0.951	63°	1.963	0.891	0.454
19°	0.344	0.326	0.946	64°	2.050	0.899	0.438
20°	0.364	0.342	0.940	65°	2.145	0.906	0.423
21°	0.384	0.358	0.934	66°	2.246	0.914	0.407
22°	0.404	0.375	0.927	67°	2.356	0.921	0.391
23°	0.424	0.391	0.921	68°	2.475	0.927	0.375
24°	0.445	0.407	0.914	69°	2.605	0.934	0.358
25°	0.466	0.423	0.906	70°	2.748	0.940	0.342
26°	0.488	0.438	0.899	71°	2.904	0.946	0.326
27°	0.510	0.454	0.891	72°	3.078	0.951	0.309
28°	0.532	0.469	0.883	73°	3.271	0.956	0.292
29°	0.554	0.485	0.875	74°	3.487	0.961	0.276
30°	0.577	0.500	0.866	75°	3.732	0.966	0.259
31°	0.601	0.515	0.857	76°	4.011	0.970	0.242
32°	0.625	0.530	0.848	77°	4.332	0.974	0.225
33°	0.649	0.545	0.839	78°	4.705	0.978	0.208
34°	0.675	0.559	0.829	79°	5.145	0.982	0.191
35°	0.700	0.574	0.819	80°	5.671	0.985	0.174
36°	0.727	0.588	0.809	81°	6.314	0.988	0.156
37°	0.754	0.602	0.799	82°	7.115	0.990	0.139
38°	0.781	0.616	0.788	83°	8.144	0.993	0.122
39°	0.810	0.629	0.777	84°	9.514	0.995	0.105
40°	0.839	0.643	0.766	85°	11.430	0.996	0.087
41°	0.869	0.656	0.755	86°	14.301	0.998	0.070
42°	0.900	0.669	0.743	87°	19.081	0.999	0.052
43°	0.933	0.682	0.731	88°	28.636	0.999	0.035
44°	0.966	0.695	0.719	89°	57.290	1.000	0.017
45°	1.000	0.707	0.707				

Table of Squares & Square Roots

n	n^2	n	n	n^2	n
1	1	1.000	51	2601	7.141
2	4	1.414	52	2704	7.211
3	9	1.732	53	2809	7.280
4	16	2.000	54	2916	7.348
5	25	2.236	55	3025	7.416
6	36	2.449	56	3136	7.483
7	49	2.646	57	3249	7.550
8	64	2.828	58	3364	7.616
9	81	3.000	59	3481	7.681
10	100	3.162	60	3600	7.746
11	121	3.317	61	3721	7.810
12	144	3.464	62	3844	7.874
13	169	3.606	63	3969	7.937
14	196	3.742	64	4096	8.000
15	225	3.873	65	4225	8.062
16	256	4.000	66	4356	8.124
17	289	4.123	67	4489	8.185
18	324	4.243	68	4624	8.246
19	361	4.359	69	4761	8.307
20	400	4.472	70	4900	8.367
21	441	4.583	71	5041	8.426
22	484	4.690	72	5184	8.485
23	529	4.796	73	5329	8.544
24	576	4.899	74	5476	8.602
25	625	5.000	75	5625	8.660
26	676	5.099	76	5776	8.718
27	729	5.196	77	5929	8.775
28	784	5.292	78	6084	8.832
29	841	5.385	79	6241	8.888
30	900	5.477	80	6400	8.944
31	961	5.568	81	6561	9.000
32	1024	5.657	82	6724	9.055
33	1089	5.745	83	6889	9.110
34	1156	5.831	84	7056	9.165
35	1225	5.916	85	7225	9.220
36	1296	6.000	86	7396	9.274
37	1369	6.083	87	7569	9.327
38	1444	6.164	88	7744	9.381
39	1521	6.245	89	7921	9.434
40	1600	6.325	90	8100	9.487
41	1681	6.403	91	8281	9.539
42	1764	6.481	92	8464	9.592
43	1849	6.557	93	8649	9.644
44	1936	6.633	94	8836	9.695
45	2025	6.708	95	9025	9.747
46	2116	6.782	96	9216	9.798
47	2209	6.856	97	9409	9.849
48	2304	6.928	98	9604	9.899
49	2401	7.000	99	9801	9.950
50	2500	7.071	100	10000	10.000

